


Task 1. Which brush is 1 dm long? Colour the square next to it.


☐

☐

☐

☐

☐

Task 2. Measure the segment. How many centimeters is its length? And how many decimeters?



cm = dm



cm = dm

Task 3. Fill in the correct answer.

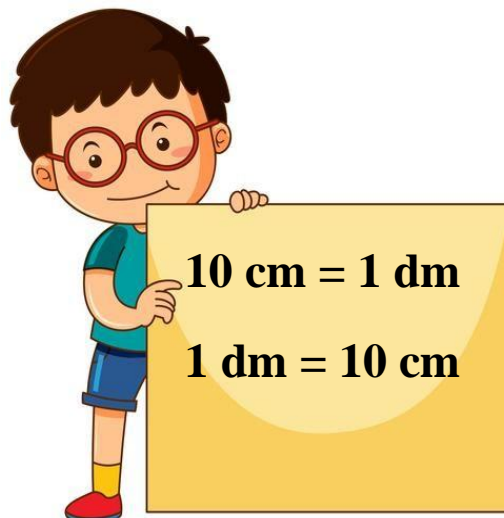
20 cm = dm

60 cm = dm

100 cm = dm

4 dm = cm

8 dm = cm



Task 4. Fill in the correct answer.

$$3 \text{ m} = \boxed{} \boxed{} \text{ dm}$$

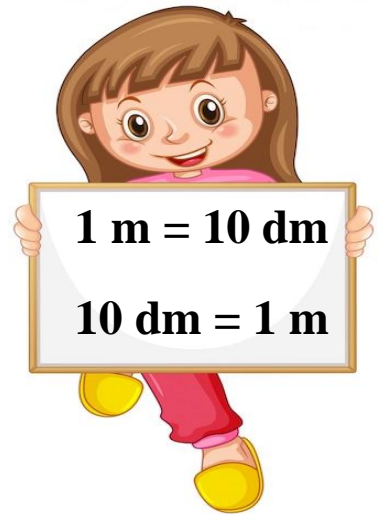
$$5 \text{ m} = \boxed{} \boxed{} \text{ dm}$$

$$10 \text{ m} = \boxed{} \boxed{} \boxed{} \text{ dm}$$

$$60 \text{ dm} = \boxed{} \text{ m}$$

$$90 \text{ dm} = \boxed{} \text{ m}$$

$$100 \text{ dm} = \boxed{} \boxed{} \text{ m}$$



Task 5. You have to measure the objects on the left. Which measuring tool will you use for the pencil sharpener? And for the tree?



Task 6. Sort by height. Number the shortest thing with 1 and the tallest one - with 4.



